

Name _____ Date _____

In Full Bloom


How many petals are in each set?

On each flower, write the number of petals.

Write an addition sentence.

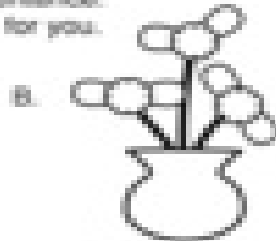
Then write a multiplication sentence.

The first one has been done for you.



$4 + 4 = 8$

$2 \times 4 = 8$



___ + ___ + ___ = ___

___ \times ___ = ___




___ + ___ + ___ + ___ = ___

___ \times ___ = ___




___ + ___ + ___ + ___ + ___ = ___

___ \times ___ = ___




___ + ___ + ___ + ___ + ___ + ___ = ___

___ \times ___ = ___




___ + ___ + ___ + ___ + ___ + ___ + ___ = ___

___ \times ___ = ___



___ + ___ + ___ + ___ + ___ + ___ + ___ + ___ = ___

___ \times ___ = ___



___ + ___ + ___ + ___ + ___ + ___ + ___ + ___ + ___ = ___

___ \times ___ = ___

