


Name: _____


The Midpoint Formula

Find the midpoint of each line segment.


19




20



21



22



Find the midpoint of the line segment with the given endpoints.

23. $(6, 15)$, $(-2, 12)$

24. $(8, 16)$, $(-4, 16)$

25. $(-3, 4)$, $(-6, 1)$

26. $(4, -1)$, $(3, 1)$

27. $(-2, -10)$, $(-3, 9)$

28. $(8, 1)$, $(8, 6)$

29. $(5, 1)$, $(-4, -2)$

30. $(-4, -1)$, $(7, 7)$

31. $(-4, 6)$, $(6, -1)$

32. $(10, 7)$, $(6, -1)$