



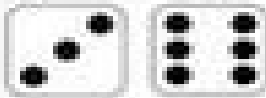



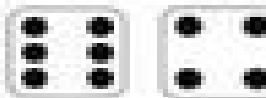





Name: _____

Directions: Count the dots on each die. Write the number under the die. Add the number. Write the answer.

1  $2 + 4 = 6$	2  $3 + 1 = \underline{\quad}$	3  $6 + 1 = \underline{\quad}$
4  $\underline{\quad} + \underline{\quad} = \underline{\quad}$	5  $\underline{\quad} + \underline{\quad} = \underline{\quad}$	6  $\underline{\quad} + \underline{\quad} = \underline{\quad}$
7  $\underline{\quad} + \underline{\quad} = \underline{\quad}$	8  $\underline{\quad} + \underline{\quad} = \underline{\quad}$	9  $\underline{\quad} + \underline{\quad} = \underline{\quad}$
10  $\underline{\quad} + \underline{\quad} = \underline{\quad}$	11  $\underline{\quad} + \underline{\quad} = \underline{\quad}$	12  $\underline{\quad} + \underline{\quad} = \underline{\quad}$