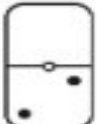
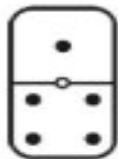
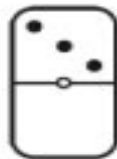
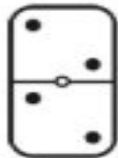
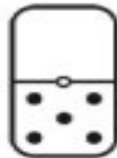
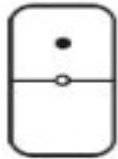
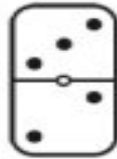


Domino Dot Addition

Worksheet 1

Write an addition equation to represent the dots in the top section and the dots in the bottom section of each domino.

Example.  $\overset{\text{Dots in top section.}}{\underline{0}} + \underset{\text{Dots in bottom section.}}{\underline{2}} = \underline{2}$ Total of all dots.


____ + ____ = ____
____ + ____ = ____
____ + ____ = ____
____ + ____ = ____
____ + ____ = ____
____ + ____ = ____