


**Exam 2018 - 2019/20**

Name: \_\_\_\_\_

1. Classify the following vertebrate animals into the following groups:



Snake



Parrot




Crab



Frog



Chameleon




Cow



Fish



Bird



Group of Sheep



Rabbit

**REPTILES**

**BIRDS**

**MAMMALS**

**AMPHIBIANS**

**FISH**

2. Group the following animals into the correct groups:

**Animals** \_\_\_\_\_

**Fish** \_\_\_\_\_

**Mammals** \_\_\_\_\_

**Amphibians** \_\_\_\_\_