










1. Which of the four major taxonomic groups contains the most?



2. How are all 4 kingdoms related? What is the difference between the kingdoms plants and animals?
3. Draw the following animals in your notebook's science, art, or writing. Put a small drawing in each row, and label it.

Plants Characteristics

Amoeba		Plant	
Quail		Plant	
Antenna		Plant	
Crustacean		Plant	
Plant		Crustacean	