

Name _____

..... **Zero in on the Order**



Write the sums.

1. $\begin{array}{r} 0 \\ + 8 \\ \hline \end{array}$

2. $\begin{array}{r} 8 \\ + 0 \\ \hline \end{array}$

3. $\begin{array}{r} 4 \\ + 6 \\ \hline \end{array}$

4. $\begin{array}{r} 6 \\ + 4 \\ \hline \end{array}$

5. $\begin{array}{r} 9 \\ + 1 \\ \hline \end{array}$

6. $\begin{array}{r} 1 \\ + 9 \\ \hline \end{array}$

7. $\begin{array}{r} 5 \\ + 3 \\ \hline \end{array}$

8. $\begin{array}{r} 3 \\ + 5 \\ \hline \end{array}$

9. $\begin{array}{r} 7 \\ + 3 \\ \hline \end{array}$

10. $\begin{array}{r} 0 \\ + 5 \\ \hline \end{array}$

11. $\begin{array}{r} 2 \\ + 6 \\ \hline \end{array}$

12. $\begin{array}{r} 8 \\ + 2 \\ \hline \end{array}$

13. $\begin{array}{r} 6 \\ + 0 \\ \hline \end{array}$

14. $\begin{array}{r} 4 \\ + 3 \\ \hline \end{array}$

15. $\begin{array}{r} 3 \\ + 6 \\ \hline \end{array}$


16. $\begin{array}{r} 0 \\ + 4 \\ \hline \end{array}$

17. $\begin{array}{r} 5 \\ + 4 \\ \hline \end{array}$

18. $\begin{array}{r} 9 \\ + 0 \\ \hline \end{array}$

19. $\begin{array}{r} 3 \\ + 4 \\ \hline \end{array}$

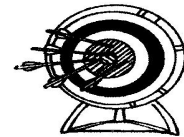
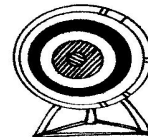
20. $\begin{array}{r} 5 \\ + 2 \\ \hline \end{array}$



Real World Connection

Tell a story. Write two addition sentences.

21. _____ + _____ = _____
_____ + _____ = _____



arrows