



What's Missing?


Fill in the missing info.




$$4 + 1 = 5$$




$$5 + \quad = 11$$




$$\quad + 6 = 8$$




$$\quad + 4 = 10$$




$$3 + \quad = 9$$




$$2 + \quad = 6$$



$$1 + \quad = 7$$



$$6 + \quad = 12$$



$$\quad + 3 = 4$$