


Name: _____

Math Practice: Understanding Fractions (3.NF.3)


3rd Grade
Monday
2nd 9 Weeks

Write the equivalent fractions.



Label the number lines. Identify the equivalent fractions.

Label $\frac{1}{2}$ $\frac{2}{2}$



What fractions are equivalent to 1? _____

Label $\frac{1}{6}$ $\frac{2}{6}$ $\frac{3}{6}$ $\frac{4}{6}$ $\frac{5}{6}$ $\frac{6}{6}$



What fraction is equivalent to $\frac{1}{2}$? _____


What fraction is equivalent to $\frac{1}{3}$? _____

What fraction is equivalent to $\frac{4}{6}$? _____

Label $\frac{1}{3}$ $\frac{2}{3}$ $\frac{3}{3}$



Compare. Write $<$ $>$ $=$



Express the whole numbers as fractions.

6 = _____

2 = _____

1 = _____

5 = _____

Explain your thinking.

My friend and I shared a chocolate candy bar. I ate $\frac{1}{2}$ of the candy bar and my friend ate $\frac{1}{4}$ of the candy bar. **Who ate more?** Show your thinking in words, pictures, and numbers.