


Name _____


arrays

Directions: Write how many columns and rows each array has.




___ columns

___ rows




___ columns

___ rows




___ columns

___ rows



___ columns

___ rows



___ columns

___ rows