

Name : _____

Score : _____

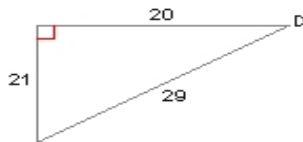
Teacher : _____

Date : _____

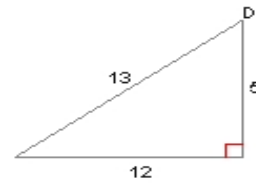
Inverse Trigonometric Ratios

Find the measure of the indicated angle to the nearest degree.

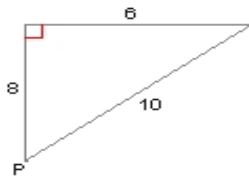
1) $m\angle D = \underline{\hspace{2cm}}^\circ$



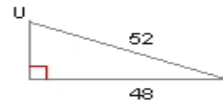
2) $m\angle D = \underline{\hspace{2cm}}^\circ$



3) $m\angle P = \underline{\hspace{2cm}}^\circ$



4) $m\angle U = \underline{\hspace{2cm}}^\circ$



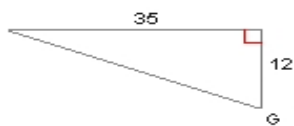
5) $m\angle O = \underline{\hspace{2cm}}^\circ$



6) $m\angle G = \underline{\hspace{2cm}}^\circ$



7) $m\angle G = \underline{\hspace{2cm}}^\circ$



8) $m\angle N = \underline{\hspace{2cm}}^\circ$

