


NAME \_\_\_\_\_

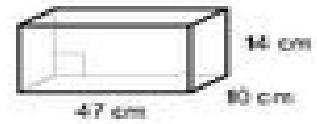
DATE \_\_\_\_\_

Find the volume and surface area of each figure. (Figures shown are not drawn to scale)

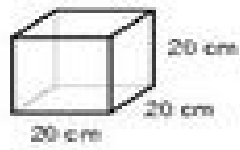
1)



2)



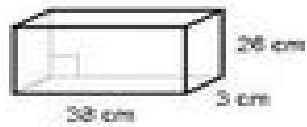
3)



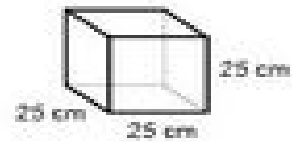
4)



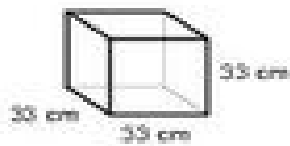
5)



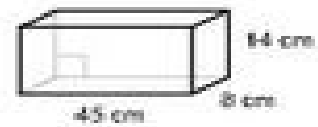
6)



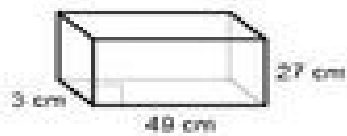
7)



8)



9)



10)

