

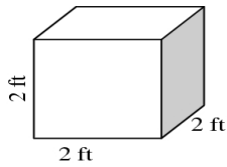
Name _____ Period _____ Date _____

Volume and Surface Area of Rectangular Prisms and Cylinders

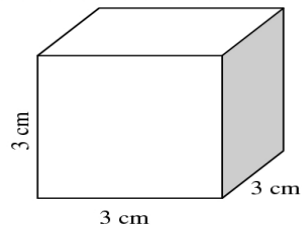
Remember, the volume of a shape is how many cubic units you can fit inside it. What are the areas of the cubes drawn below? Make sure you write the units.

Volume of a Rectangular Prism = _____
Surface Area of a Rectangular Prism = _____

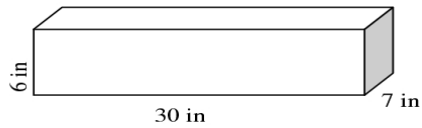
1) Volume = _____
Surface Area = _____



2) Volume = _____
Surface Area = _____



3) Volume = _____
Surface Area = _____



4) Volume = _____
Surface Area = _____

