



$$\begin{array}{r} 5 \\ + 2 \\ \hline \end{array}$$



Name: \_\_\_\_\_


$$\begin{array}{r} 4 \\ + 3 \\ \hline 7 \end{array}$$



Four teeth on the top three on the bottom equal seven teeth in all.


Can you draw teeth on the shark?

$$\begin{array}{r} 4 \\ + 4 \\ \hline \end{array}$$


$$\begin{array}{r} 5 \\ + 3 \\ \hline \end{array}$$


$$\begin{array}{r} 6 \\ + 3 \\ \hline \end{array}$$


$$\begin{array}{r} 5 \\ + 4 \\ \hline \end{array}$$


$$\begin{array}{r} 3 \\ + 3 \\ \hline \end{array}$$


$$\begin{array}{r} 5 \\ + 5 \\ \hline \end{array}$$
