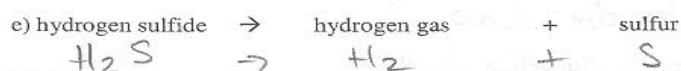

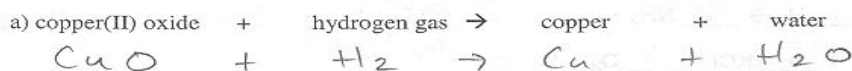
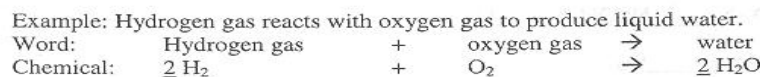


## Word equations

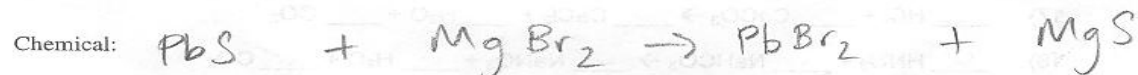
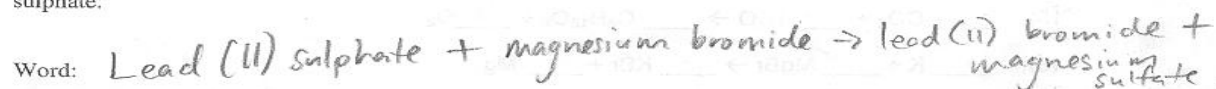
1. For each of the following, write the correct skeleton equation, and then balance it:



2. For each of the following, write the word equation, then the skeleton equation and balance it:



a) Lead(II) sulphate and magnesium bromide undergo a reaction to produce lead(II) bromide and magnesium sulphate.



b) Calcium metal reacts with tin (IV) chloride to form calcium chloride and tin.

