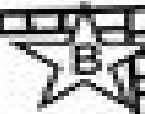



Name _____



GROUPS of ten


Circle each group of ten to help you count.




2 tens 3 ones
23



___ tens ___ ones



___ tens ___ ones



___ tens ___ ones

This was: Easy Just Right Hard
(Circle one)