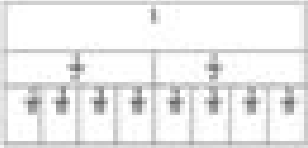









Equivalent Fractions

Name: _____

Date: _____

Color the fraction strips to show the equations. Then write the missing numerator.

<p>1.</p> <div style="text-align: center;">  </div> <p style="text-align: center;">$\frac{1}{4} = \frac{\quad}{8}$</p>	<p>2.</p> <div style="text-align: center;">  </div> <p style="text-align: center;">$\frac{1}{3} = \frac{\quad}{6}$</p>
<p>3.</p> <div style="text-align: center;">  </div> <p style="text-align: center;">$\frac{1}{2} = \frac{\quad}{4}$</p>	<p>4.</p> <div style="text-align: center;">  </div> <p style="text-align: center;">$\frac{1}{3} = \frac{\quad}{9}$</p>
<p>5.</p> <div style="text-align: center;">  </div> <p style="text-align: center;">$\frac{1}{2} = \frac{\quad}{6}$</p>	<p>6.</p> <div style="text-align: center;">  </div> <p style="text-align: center;">$\frac{1}{4} = \frac{\quad}{8}$</p>
<p>7.</p> <div style="text-align: center;">  </div> <p style="text-align: center;">$\frac{1}{2} = \frac{\quad}{6}$</p>	<p>8.</p> <div style="text-align: center;">  </div> <p style="text-align: center;">$\frac{1}{4} = \frac{\quad}{8}$</p>