













# Counting Coins

Name: \_\_\_\_\_

Count each set of coins and write the answer.

<p>1.</p>  <p>48¢</p> <p>_____</p>	<p>2.</p>  <p>_____</p>	<p>3.</p>  <p>_____</p>
<p>4.</p>  <p>_____</p>	<p>5.</p>  <p>_____</p>	<p>6.</p>  <p>_____</p>
<p>7.</p>  <p>_____</p>	<p>8.</p>  <p>_____</p>	<p>9.</p>  <p>_____</p>
<p>10.</p>  <p>_____</p>	<p>11.</p>  <p>_____</p>	<p>12.</p>  <p>_____</p>