

Name \_\_\_\_\_









888


Counting coins

# Flower to Flower

Count. Write each amount.  
Color the matching flower.



<p>A</p>  <p>_____ ¢</p>	<p>B</p>  <p>_____ ¢</p>	<p>C</p>  <p>_____ ¢</p>	<p>D</p>  <p>_____ ¢</p>
<p>E</p>  <p>_____ ¢</p>	<p>F</p>  <p>_____ ¢</p>	<p>G</p>  <p>_____ ¢</p>	<p>H</p>  <p>_____ ¢</p>



**Notes:** How many quarters equal the same amount as five dimes?