

Name: _____

Naming circles, diameters, and radii

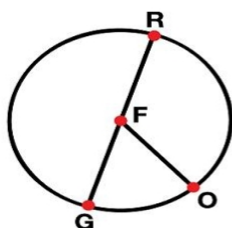
Circles

A circle is named by the point in the center.

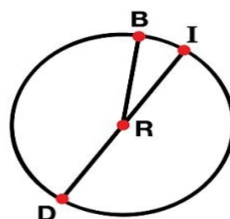
A radius is a line segment from the center of the circle to the edge.

A diameter is a line segment that passes through the center of a circle. It has two points on the outside edge of the circle.

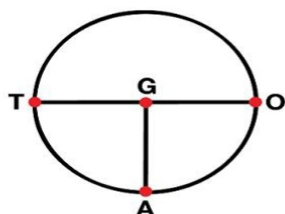
Write the name of each circle, radius, and diameter.



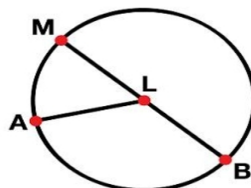
circle: E
radius: FQ
diameter: RG



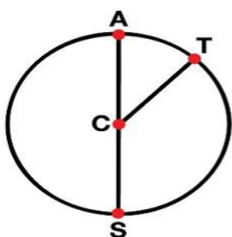
circle: _____
radius: _____
diameter: _____



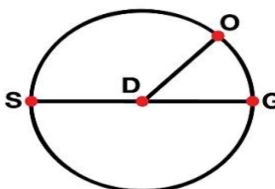
circle: _____
radius: _____
diameter: _____



circle: _____
radius: _____
diameter: _____



circle: _____
radius: _____
diameter: _____



circle: _____
radius: _____
diameter: _____