




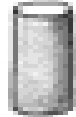


3-dimensional shapes

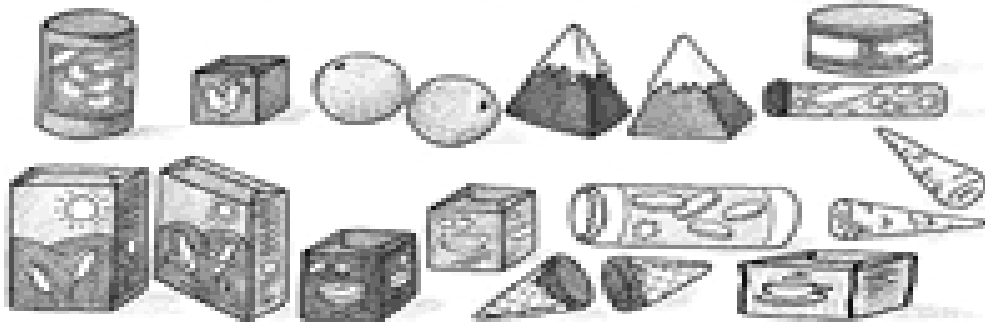
Label the 3-D shapes.
(cone, cylinder, pyramid, cube, sphere, rectangular prism)



cube



How many of each 3-D shape?



cube

3

rectangular
prism

cone

cylinder

pyramid

sphere