

Name : \_\_\_\_\_

Score : \_\_\_\_\_

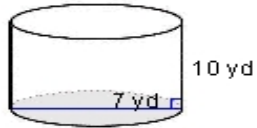
Teacher : \_\_\_\_\_

Date : \_\_\_\_\_

**Volume of Cylinders and Cones**

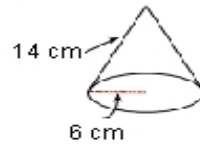
Find the volume of each figure. Round answers to the nearest hundredth, if necessary.

1)



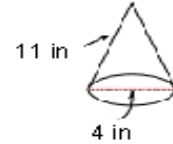
Volume: \_\_\_\_\_

2)



Volume: \_\_\_\_\_

3)



Volume: \_\_\_\_\_

4)



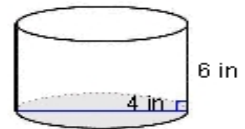
Volume: \_\_\_\_\_

5)



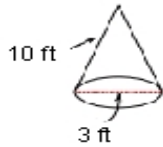
Volume: \_\_\_\_\_

6)



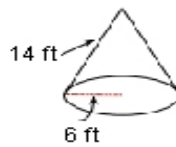
Volume: \_\_\_\_\_

7)



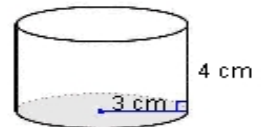
Volume: \_\_\_\_\_

8)



Volume: \_\_\_\_\_

9)



Volume: \_\_\_\_\_

