

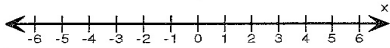
Name: _____

Score: _____

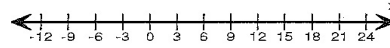
One step Inequalities

Solve each inequality and graph the solutions:

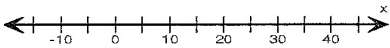
1) $x + 7 \geq 4$



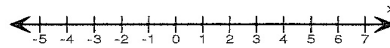
2) $\frac{x}{3} < 5$



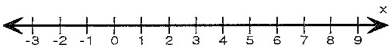
3) $x - 9 > 11$



4) $3x \leq 15$

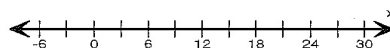


5) $x - 1 < 6$

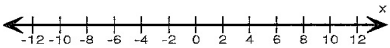


6) $\frac{x}{2} \geq 9$

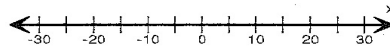
ae



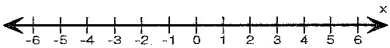
7) $2x > 4$



8) $x + 12 \leq 7$



9) $x + 1 < 4$



10) $x - 6 \leq 10$

