

# Five Minute Mozart ©

"All you need to know in five minutes or less"


## ANSWER KEY

Write in the correct pattern of whole steps and half steps which forms a major scale.


Whole Step Whole Step Half Step Whole Step Whole Step Whole Step Half Step

Construct the following major scales beginning with each given note.


C Major Scale

A musical staff in treble clef showing the C major scale. The notes are C, D, E, F, G, A, B, and C, with a double bar line at the end.


G Major Scale

A musical staff in treble clef showing the G major scale. The notes are G, A, B, C, D, E, F#, and G, with a double bar line at the end.

D Major Scale

A musical staff in treble clef showing the D major scale. The notes are D, E, F#, G, A, B, C#, and D, with a double bar line at the end.


A Major Scale

A musical staff in treble clef showing the A major scale. The notes are A, B, C#, D, E, F#, G#, and A, with a double bar line at the end.

E Major Scale

A musical staff in treble clef showing the E major scale. The notes are E, F#, G#, A, B, C#, D#, and E, with a double bar line at the end.

B Major Scale

A musical staff in treble clef showing the B major scale. The notes are B, C#, D#, E, F#, G#, A#, and B, with a double bar line at the end.