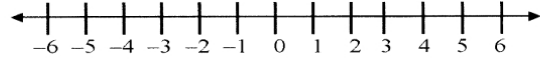
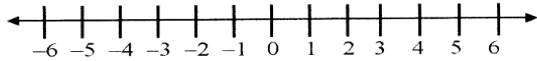


Write a compound inequality without using "and" (hint...write it as one inequality, together). Then graph the solution set on the number line provided.

1. $x < 5$ and $0 \leq x$

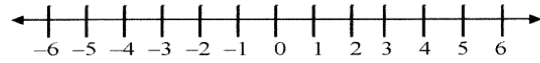
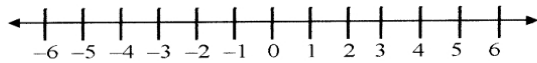
2. $x > -2$ and $x < 3$



Graph the solution set of each compound inequality

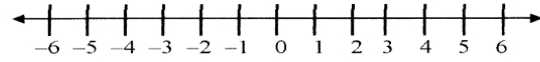
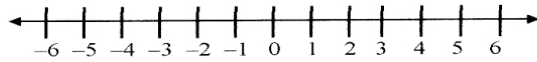
3. $m \geq -5$ and $m < 3$

4. $p < -5$ and $p > 4$



5. $s < 3$ or $s \geq 1$

6. $n \leq -5$ or $n \geq -1$



7. $w > -3$ and $w < 1$

8. $x < -5$ or $x \geq 0$

