


Name: _____


Date: _____

Gear Ratio Worksheets

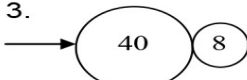
Directions: Find the gear ratio of each pair of gears. Make sure to pay attention to the driver and follower. The arrow points to the driver. Simplify all ratios and show all work

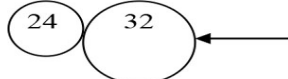
1.  GR = _____


6.  GR = _____

2.  GR = _____

7.  GR = _____

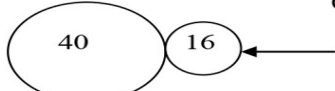
3.  GR = _____

8.  GR = _____

4.  GR = _____

9.  GR = _____

5.  GR = _____

10.  GR = _____