









Match each polygon with the correct number of sides.

<u>POLYGON</u>		<u>NUMBER OF SIDES</u>
Hexagon	_____	3
Triangle	_____	4
Pentagon	_____	8
Quadrilateral	_____	5
Octagon	_____	6

Match each figure with its name.

	_____	a. Line Segment
	_____	b. Obtuse Angle
	_____	c. Square
	_____	d. Right Triangle
	_____	e. Ray
	_____	f. Rectangle
	_____	g. Right Angle
	_____	h. Triangle
_____	_____	i. Acute Angle

A triangle that has two equal angles is _____ .

A triangle that has a 90° angle is _____ .

An angle measuring less than 90° is _____ .