




Name \_\_\_\_\_

Date \_\_\_\_\_

**Daily Math Review for 4<sup>th</sup> Grade****Week 1**

Monday	<p>If you know <math>30 = 6 \times 5</math>, then 30 is 6 times as many as _____</p>	<p>Find the perimeter of the rectangle</p>  <p>_____</p>
	<p>Round to the nearest ten thousand</p> <p>24305</p> <p>_____</p>	<p>Solve</p> $\begin{array}{r} 657 \\ + 195 \\ \hline \end{array}$
Tuesday	<p>Anna read 5 books. If her brother read 3 times as many books, how many did he read?</p>	<p>Circle the name of the geometric figure</p>  <p>ray      point      line segment</p>
	<p>Circle each fraction that is equivalent to one half.</p> <p><math>\frac{1}{4}</math>    <math>\frac{2}{4}</math>    <math>\frac{3}{4}</math>    <math>\frac{5}{10}</math></p>	<p>Solve</p> $24 \times 8 = \underline{\hspace{2cm}}$
Wednesday	<p>Which would you prefer: one gallon of hot air or one gallon of cold air? Why? Use some of your words and make the air flow many many words come in mind to work together good!</p>	<p>Circle all shapes that contain at least one right angle</p> 
	<p>Compare using &gt;, &lt;, or =</p> <p><math>\frac{2}{10}</math>    _____    <math>\frac{7}{10}</math></p>	<p>Solve</p> $82 + 9 = \underline{\hspace{2cm}}$