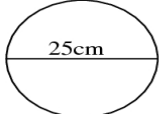
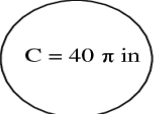
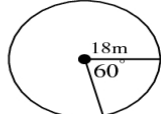
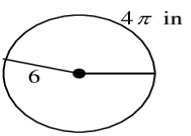
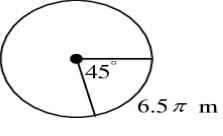
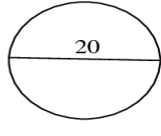


Name _____ Date _____
 Geometry, Period _____

In Class Worksheet for Circumference and Arc Length

$$C = 2\pi r, C = \pi d, \frac{\ell}{C} = \frac{m}{360}$$

Find the missing information for the following circles. Leave answers in terms of π .

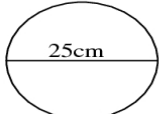
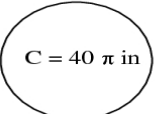
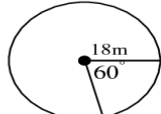
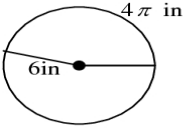
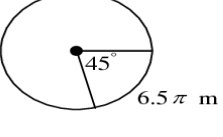
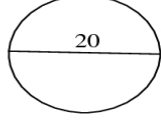
1.		2.		3.	
	$C = \underline{\hspace{2cm}}$		$r = \underline{\hspace{2cm}} \quad d = \underline{\hspace{2cm}}$		$\ell = \underline{\hspace{2cm}}$
4.		5.		6.	
	$m = \underline{\hspace{2cm}}$		$r = \underline{\hspace{2cm}}$		$\ell = \underline{\hspace{2cm}}$

Name _____ Date _____
 Geometry, Period _____

In Class Worksheet for Circumference and Arc Length

$$C = 2\pi r, C = \pi d, \frac{\ell}{C} = \frac{m}{360}$$

Find the missing information for the following circles. Leave answers in terms of π .

1.		2.		3.	
	$C = \underline{\hspace{2cm}}$		$r = \underline{\hspace{2cm}} \quad d = \underline{\hspace{2cm}}$		$\ell = \underline{\hspace{2cm}}$
4.		5.		6.	
	$m = \underline{\hspace{2cm}}$		$r = \underline{\hspace{2cm}}$		$\ell = \underline{\hspace{2cm}}$