

Pencil and Paper Task

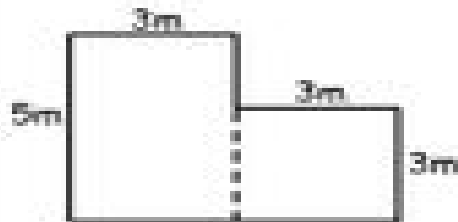
Name: _____

Area



Print

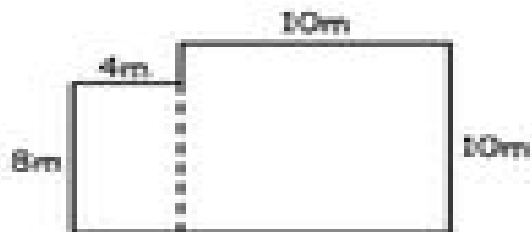
Calculate the total area of these irregular shapes.



$$A 1 = \underline{\quad} \times \underline{\quad}$$

$$A 2 = \underline{\quad} \times \underline{\quad}$$

$$\text{Total Area} = \underline{\quad}$$

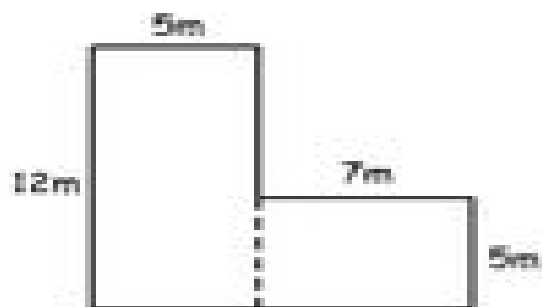


$$A 1 = \underline{\quad} \times \underline{\quad}$$

$$A 2 = \underline{\quad} \times \underline{\quad}$$

$$\text{Total Area} = \underline{\quad}$$

How many square metres of carpet are laid in this house?



$$A 1 = \underline{\quad} \times \underline{\quad}$$

$$A 2 = \underline{\quad} \times \underline{\quad}$$

$$\text{Total Area} = \underline{\quad}$$