

Name : _____

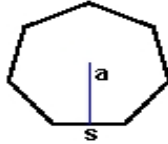
Score : _____

Teacher : _____

Date : _____

Identify and Calculate the Area and Perimeter for each Polygon.

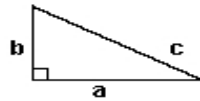
1)



s = 3.4 ft
a = 1.7 ft

Area: _____
Perimeter: _____
Type: _____

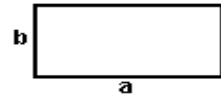
2)



a = 8.2 yds b = 4.6 yds
c = 9.4 yds

Area: _____
Perimeter: _____
Type: _____

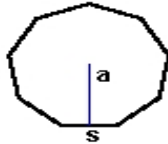
3)



a = 8.9 ft b = 4.4 ft

Area: _____
Perimeter: _____
Type: _____

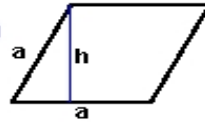
4)



s = 3.3 yds
a = 1.65 yds

Area: _____
Perimeter: _____
Type: _____

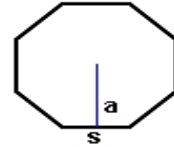
5)



a = 6.6 cm h = 5.98 cm

Area: _____
Perimeter: _____
Type: _____

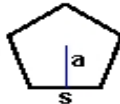
6)



s = 7.6 mm
a = 3.29 mm

Area: _____
Perimeter: _____
Type: _____

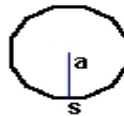
7)



s = 5.4 mm
a = 2.57 mm

Area: _____
Perimeter: _____
Type: _____

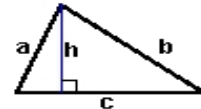
8)



s = 2.5 cm
a = 1.25 cm

Area: _____
Perimeter: _____
Type: _____

9)



a = 5.8 inches b = 8.68 inches
c = 8.9 inches h = 5.4 inches

Area: _____
Perimeter: _____
Type: _____