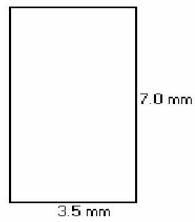


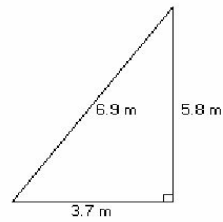
Area and Perimeter of Various Shapes (B)

Instructions: Find the area and perimeter of each shape.

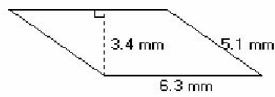
1)



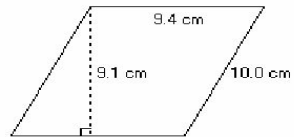
2)



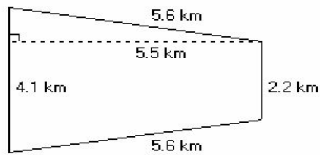
3)



4)



5)



6)

