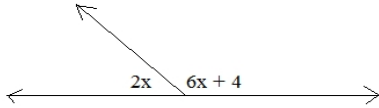


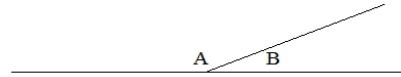
Angles Properties Quiz

1) Find x :

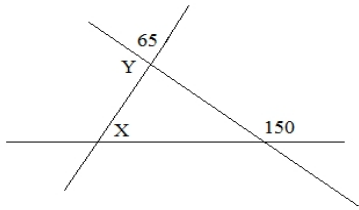


2) The ratio of A to B is 7:2

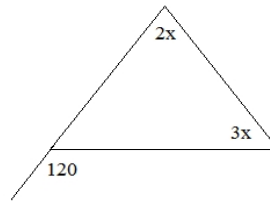
What is the measure of angle B?



3) Determine X and Y

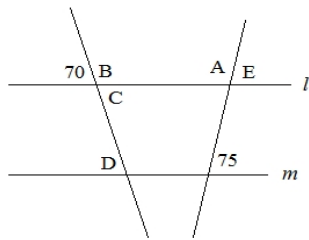


4) What is the measure of the smallest angle?

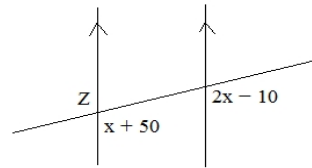


5) Given: l and m are parallel.
Find the angles:

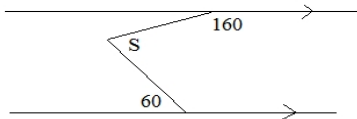
- A:
- B:
- C:
- D:
- E:



6) What is the measure of angle Z?



7) Find S:



8) Find x :

