


NAME _____

3-D Shapes



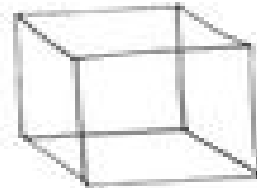
Cone

Faces: _____
Edges: _____
Vertices: _____



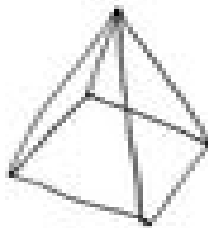
Cylinder

Faces: _____
Edges: _____
Vertices: _____



Cube

Faces: _____
Edges: _____
Vertices: _____



Pyramid

Faces: _____
Edges: _____
Vertices: _____



Rectangular Prism

Faces: _____
Edges: _____
Vertices: _____



Sphere

Faces: _____
Edges: _____
Vertices: _____