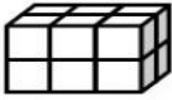
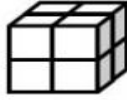


# Volume

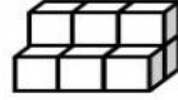
Write the volume of each shape. Be sure to label each answer with cubic units.



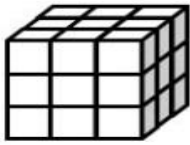
\_\_\_\_\_




\_\_\_\_\_



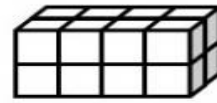
\_\_\_\_\_



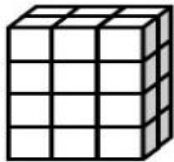
\_\_\_\_\_




\_\_\_\_\_



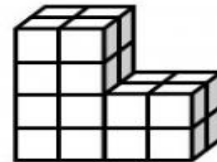
\_\_\_\_\_



\_\_\_\_\_



\_\_\_\_\_




\_\_\_\_\_



\_\_\_\_\_

Color the figure with the greatest volume.



Monster by Krista Wallden

©Hooty's Homeroom