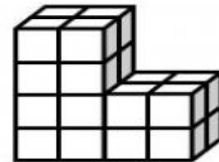


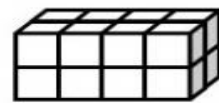

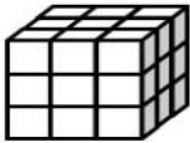
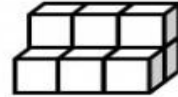
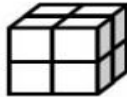
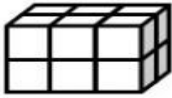



Volume

Write the volume of each shape. Be sure to label each answer with cubic units.



Color the figure with the greatest volume.



Monster by Krista Wallden

©Hooty's Homeroom