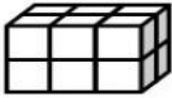
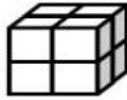
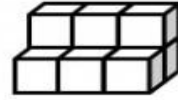


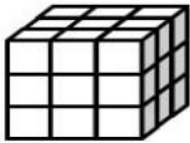
Volume


Write the volume of each shape. Be sure to label each answer with cubic units.

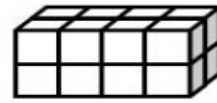


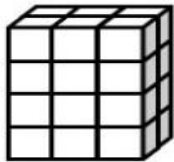





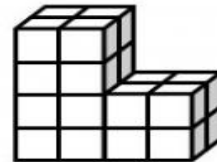















Color the
figure with
the greatest
volume.



Monster by Krista Wallden

©Hooty's Homeroom