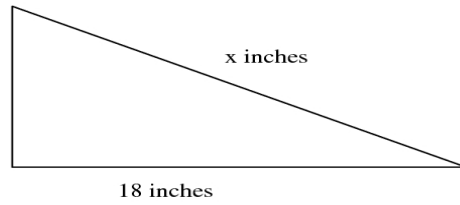
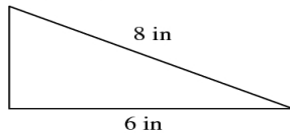


Name _____ Period _____ Date _____

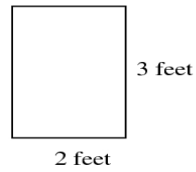

Proportions 1

For problems 1 – 4, set up the proportion for each set of similar figures and solve for the missing length.

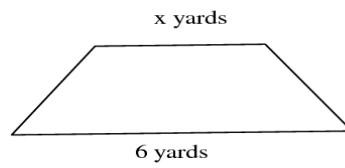

1.



2.



3.



4.

