


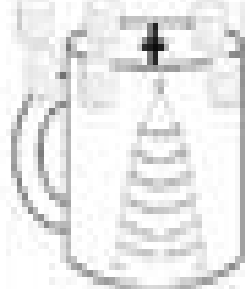
Name _____

Marshmallow Math


Hot Chocolate Addition



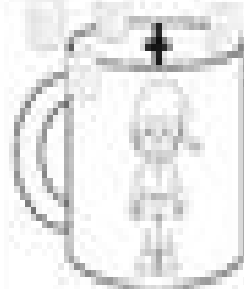
$$\begin{array}{r} + \\ \hline \end{array}$$



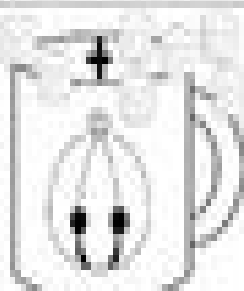
$$\begin{array}{r} + \\ \hline \end{array}$$




$$\begin{array}{r} + \\ \hline \end{array}$$



$$\begin{array}{r} + \\ \hline \end{array}$$




$$\begin{array}{r} + \\ \hline \end{array}$$



$$\begin{array}{r} + \\ \hline \end{array}$$



$$\begin{array}{r} + \\ \hline \end{array}$$



$$\begin{array}{r} + \\ \hline \end{array}$$