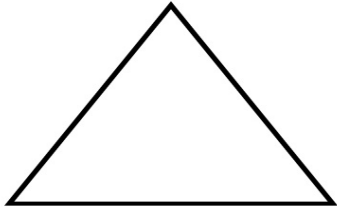


Name: \_\_\_\_\_

# Plane and Solid Shape

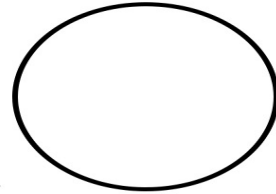
Directions: Write the number of sides (flat surfaces) and vertices each shape or figure has.



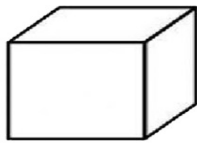
Number of sides \_\_\_\_\_  
Name \_\_\_\_\_



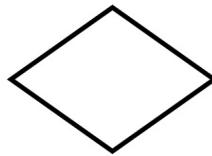
Number of sides \_\_\_\_\_  
Name \_\_\_\_\_



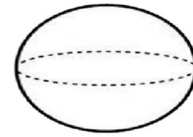
Number of sides \_\_\_\_\_  
Name \_\_\_\_\_



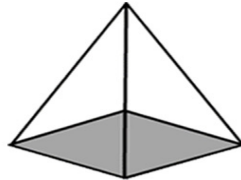
Number of sides \_\_\_\_\_  
Name \_\_\_\_\_



Number of sides \_\_\_\_\_  
Name \_\_\_\_\_



Number of sides \_\_\_\_\_  
Name \_\_\_\_\_



Number of sides \_\_\_\_\_  
Name \_\_\_\_\_



Number of sides \_\_\_\_\_  
Name \_\_\_\_\_