

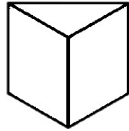
Name: _____

Date: _____

2D and 3D Shapes

Choose the correct answer.

1.

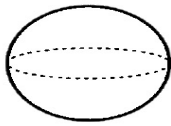


a) tetrahedron

b) Cube

c) pyramid

2.

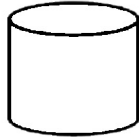


a) sphere

b) circle

c) cylinder

3.

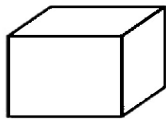


a) circle

b) cylinder

c) cube

4.



a) cube

b) sphere

c) square

5.

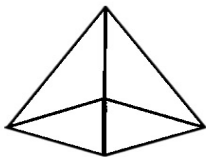


a) cube

b) cuboid

c) cone

6.



a) prism

b) tetrahedron

c) cone