


Name \_\_\_\_\_


# Place Value

Directions: Write how many tens and ones for each number.




23

\_\_\_ tens  
\_\_\_ ones



34

\_\_\_ tens  
\_\_\_ ones




45

\_\_\_ tens  
\_\_\_ ones




56

\_\_\_ tens  
\_\_\_ ones



67

\_\_\_ tens  
\_\_\_ ones



78

\_\_\_ tens  
\_\_\_ ones