



Name _____


Date _____


Add and multiply.

	$2 + 2 = \square$	$2 \times 2 = \square$
---	-------------------	------------------------

	$2 + 2 + 2 = \square$	$2 \times 3 = \square$
---	-----------------------	------------------------

	$2 + 2 + 2 + 2 = \square$	$2 \times 4 = \square$
--	---------------------------	------------------------

	$2 + 2 + 2 + 2 + 2 = \square$	$2 \times 5 = \square$
---	-------------------------------	------------------------

	$2 + 2 + 2 + 2 + 2 + 2 = \square$	$2 \times 6 = \square$
---	-----------------------------------	------------------------