

Name : _____

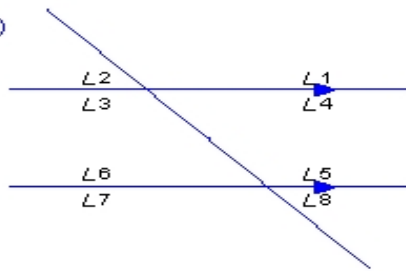
Score : _____

Teacher : _____

Date : _____

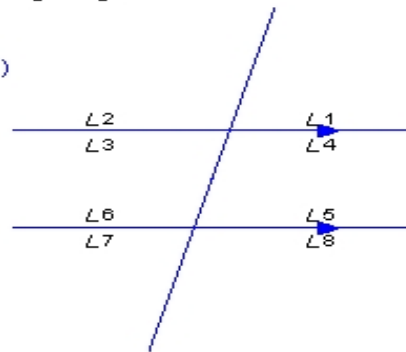
Find all of the missing angles.

1)



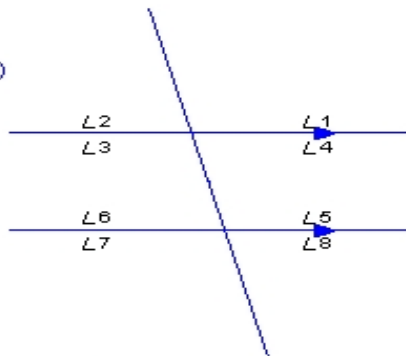
L1 = _____
L2 = _____
L3 = _____
L4 = _____
L5 = 133.9°
L6 = _____
L7 = _____
L8 = _____

2)



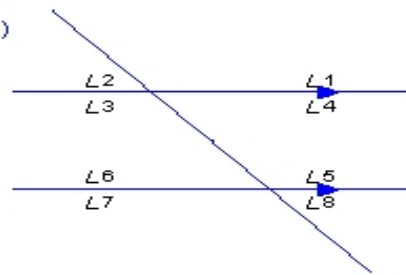
L1 = _____
L2 = _____
L3 = _____
L4 = _____
L5 = _____
L6 = _____
L7 = _____
L8 = 105.8°

3)



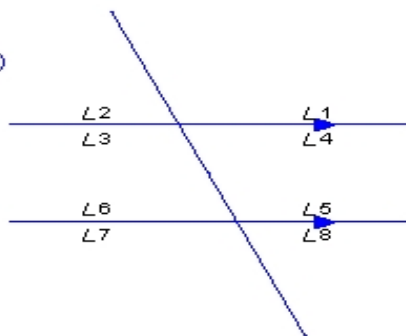
L1 = _____
L2 = _____
L3 = _____
L4 = 75.2°
L5 = _____
L6 = _____
L7 = _____
L8 = _____

4)



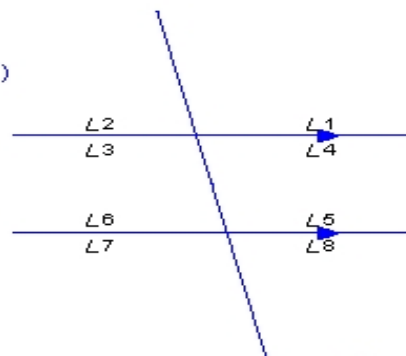
L1 = _____
L2 = _____
L3 = 133.3°
L4 = _____
L5 = _____
L6 = _____
L7 = _____
L8 = _____

5)



L1 = _____
L2 = 65.2°
L3 = _____
L4 = _____
L5 = _____
L6 = _____
L7 = _____
L8 = _____

6)



L1 = _____
L2 = _____
L3 = _____
L4 = _____
L5 = _____
L6 = _____
L7 = 103.7°
L8 = _____