



Name _____


How Many More to Make 10?



$$\square + \square = 10$$



$$\square + \square = 10$$



$$\square + \square = 10$$