



Name _____



Reindeer Ten Frames




Directions: Read the math problem on the reindeer sign. Color the boxes two different colors to show the problem. Write the number sentence with the sum on the line.


 _____ + _____ = _____

| | | | | |
|--|--|--|--|--|
| | | | | |
| | | | | |

_____ + _____ = _____

| | | | | |
|--|--|--|--|--|
| | | | | |
| | | | | |





 _____ + _____ = _____

| | | | | |
|--|--|--|--|--|
| | | | | |
| | | | | |

_____ + _____ = _____

| | | | | |
|--|--|--|--|--|
| | | | | |
| | | | | |





 _____ + _____ = _____

| | | | | |
|--|--|--|--|--|
| | | | | |
| | | | | |

_____ + _____ = _____

| | | | | |
|--|--|--|--|--|
| | | | | |
| | | | | |



 _____ + _____ = _____

| | | | | |
|--|--|--|--|--|
| | | | | |
| | | | | |

_____ + _____ = _____

| | | | | |
|--|--|--|--|--|
| | | | | |
| | | | | |

