

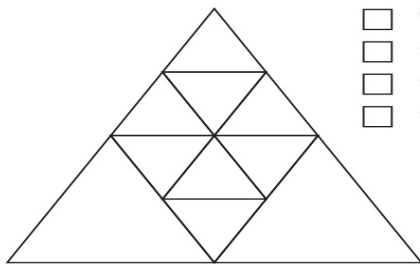
IQ TEST QUESTIONS

Name: _____

Date: _____

Answer the questions.

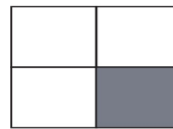
How many triangles do you see in the picture?



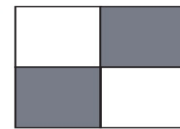
- ☐ 9
- ☐ 13
- ☐ 17
- ☐ 15

Which shape does not belong to the group?

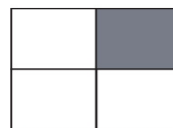
A




C



B



D



What is the value of the top row of the grid?

B	A	C	B
B	A	A	B
C	A	B	A
A	B	A	A

90

☐ 100

☐ 140

What word can you form using all the letters in the box?

G	E	T
I	C	A
S	T	R