




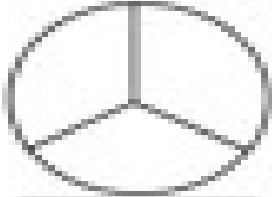





Name: \_\_\_\_\_

## Fractions - Halves and Thirds and Fourths

Directions: Write the word **halves**, **thirds**, or **fourths** under each picture to tell if the shape is split into halves or thirds.

 _____ ..... _____	 _____ ..... _____	 _____ ..... _____
 _____ ..... _____	 _____ ..... _____	 _____ ..... _____
 _____ ..... _____	 _____ ..... _____	 _____ ..... _____