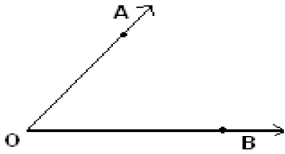
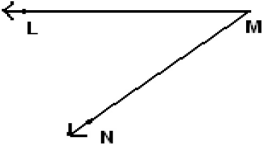

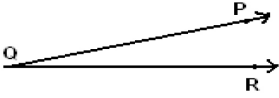

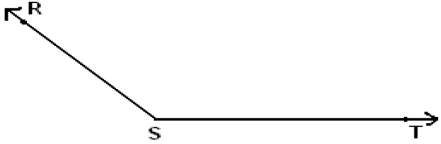
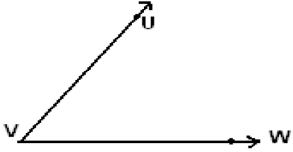
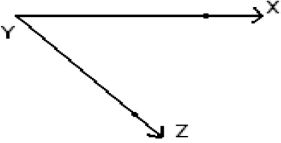


Student Name: \_\_\_\_\_

Score: \_\_\_\_\_

**Vertex and Sides Formed by Angles**

Name the vertex and sides formed by the angles:

 <p>Vertex: _____ Sides: _____</p>	 <p>Vertex: _____ Sides: _____</p>
 <p>Vertex: _____ Sides: _____</p>	 <p>Vertex: _____ Sides: _____</p>
 <p>Vertex: _____ Sides: _____</p>	 <p>Vertex: _____ Sides: _____</p>
 <p>Vertex: _____ Sides: _____</p>	 <p>Vertex: _____ Sides: _____</p>