


# Triangles



Look at these different triangles.




**Equilateral**  
All sides equal,  
all angles equal.








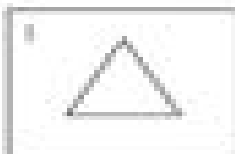
**Isosceles**  
Two sides equal.



**Scalene**  
All sides different.



**Right angle**  
Among the collection of  
triangles, this one stands  
out for a right angle.



List the triangles that are:

Equilateral \_\_\_\_\_

Isosceles \_\_\_\_\_

Scalene \_\_\_\_\_

Right angle \_\_\_\_\_